



SUBJECT: **Hairdressing and Beauty**
 PAPER NUMBER: Synoptic – Unit 2
 DATE: 4th November 2025
 TIME: 8:30 a.m. to 10:35 a.m.

**THIS PAPER SHOULD BE RETURNED TO THE INVIGILATOR
AFTER THE EXAMINATION.**

For examiners' use only:

Question	1	2	3	4	5	6	7	8	Total
Score									
Maximum	6	8	8	8	8	8	12	12	70

Answer **All** the questions in the space provided.

Question 1

K-1 (6 marks)

a. List **TWO** skin diseases and **TWO** skin disorders.

Skin disease 1: _____ (0.5)

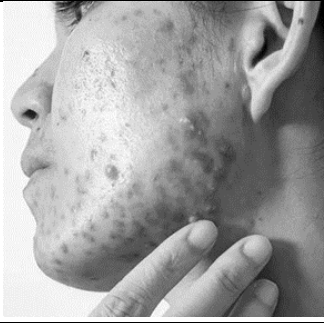

Skin disease 2: _____ (0.5)

Skin disorder 1: _____ (0.5)

Skin disorder 2: _____ (0.5)

b. Identify the diseases and disorders in Table 1.

Table 1: Diseases and Disorders

i.		<p>_____</p> <p>(0.5)</p>
ii.		<p>_____</p> <p>(0.5)</p>
iii.	<p>The abnormal growth of skin cells which most often develops on skin exposed to the sun.</p>	<p>_____</p> <p>(0.5)</p>
iv.	<p>This disorder is commonly known as dandruff.</p>	<p>_____</p> <p>(0.5)</p>

(Sources: www.amaris-b.com, www.shutterstock.com)

c. Describe a cause and a treatment of **ONE** skin disease and **ONE** skin disorder.

Skin disease: _____

Cause: _____

_____ (0.5)

Treatment: _____

_____ (0.5)

Skin disorder: _____

Cause: _____

_____ (0.5)

Treatment: _____

_____ (0.5)

6

Question 2

K-2 (8 marks)

a. Define the term contraindications.

_____ (2)

b. List **TWO** contraindications for scalp treatment and **TWO** contraindications for face treatment apart from the ones mentioned in Question 2c.

Scalp:

Contraindication 1: _____ (0.5)

Contraindication 2: _____ (0.5)

Face:

Contraindication 1: _____ (0.5)

Contraindication 2: _____ (0.5)

This question continues on next page.

c. Categorise the following contraindications for scalp or face treatments in Table 2. Some conditions can be contraindicated for both scalp and face treatments.

Greasiness High blood pressure	Sunburn Hypersensitive skin
-----------------------------------	--------------------------------

Table 2: Contraindications

Face treatments	Scalp treatments

(4)

8

Question 3

K-3 (8 marks)

a. Name **TWO** hair and **TWO** skin conditions.

Hair Condition 1: _____ (0.5)


Hair Condition 2: _____ (0.5)

Skin Condition 1: _____ (0.5)

Skin Condition 2: _____ (0.5)

b. Identify the hair and skin conditions given in Table 3 by the appropriate term.

Table 3: Hair and skin conditions

i.	 <p>(Source: www.shutterstock.com)</p>	<p>_____</p> <p>_____</p> <p>(0.5)</p>
ii.	<p>A rare hereditary hair condition characterised by fragile, beaded hair strands prone to breakage, resulting in patchy hair loss and reduced hair growth.</p>	<p>_____</p> <p>_____</p> <p>(0.5)</p>

iii.	This skin condition may show signs of fine lines, wrinkles, and age spots.	(0.5)
iv.	This skin condition is caused by sun exposure and hormones, which can result in the skin to lighten, darken or change in colour.	(0.5)

c. Describe any **TWO** hair and any **TWO** skin conditions, apart from the ones identified in Question 3b.

Hair Condition 1:

(1)

Hair Condition 2:

(1)

Skin Condition 1:

(1)

Skin Condition 2:

(1)

8

Please turn the page.

Blank Page